

EMINENT KIDS MONTESSORI SCHOOL

3, Ezekiel Salako Street, Off Ifedayo Street, Igbobi Estate,
Olope Meji, Mowe, Ogun State.



LEARN AT HOME PACK
(2019-2020 SESSION)

INFANT 1

NAME:

SUBJECT: NUMERACY

Answer all questions correctly

Count orally number 1 - 120 and touch accordingly

1	2	3	4	5	6	7	8	9	10
11	12	13	14	15	16	17	18	19	20
21	22	23	24	25	26	27	28	29	30
31	32	33	34	35	36	37	38	39	40
41	42	42	44	45	46	47	48	49	50
51	52	53	54	55	56	57	58	59	60
61	62	63	64	65	66	67	68	69	70
71	72	73	74	75	76	77	78	79	80
81	82	83	84	85	86	87	88	89	90
91	92	93	94	95	96	97	98	99	100
101	102	103	104	105	106	107	108	109	110
111	112	113	114	115	116	117	118	119	120

2. Add up the following numbers together

i. $8 + 9 =$ _____ ii. $4 + 7 =$ _____

iii. $5 + 6 =$ _____ iv. $3 + 8 =$ _____

v. $13 + 5 =$ _____ vi. $2 + 7 =$ _____

vii.
$$\begin{array}{r} 6 \\ + 4 \\ \hline \\ \hline \end{array}$$

viii.
$$\begin{array}{r} 9 \\ + 7 \\ \hline \\ \hline \end{array}$$

ix.
$$\begin{array}{r} 3 \\ + 5 \\ \hline \\ \hline \end{array}$$

.
$$\begin{array}{r} 8 \\ + 6 \\ \hline \\ \hline \end{array}$$

3. Count backwards from 20 - 0

30 _____

4. Write the end numbers of the following;

i. 59 _____

ii. 79 _____

iii. 29 _____

iv. 39 _____

v. 69 _____

8. Dictation of numbers from 1 - 100

i. _____

ii. _____

iii. _____

iv. _____

v. _____

EMINENT KIDS MONTESSORI SCHOOL

3, Ezekiel Salako Street, Off Ifedayo Street, Igbobi Estate,
Olope Meji, Mowe, Ogun State.



LEARN AT HOME PACK
(2019-2020 SESSION)

INFANT 1

NAME:

SUBJECT: LITERACY

Answer all questions correctly

1. Sound orally Aa - Zz with demonstration.

Aa	Bb	Cc	Dd	Ee	Ff	Gg	Hh	Ii	Jj	Kk	Ll	Mm
Nn	Oo	Pp	Qq	Rr	Ss	Tt	Uu	Vv	Ww	Xx	Yy	Zz

2. How many vowels are there in the alphabet? _____

List them: _____

3. Write ten 2 phonetic sounds

i. _____

ii. _____

iii. _____

iv. _____

v. _____

vi. _____

vii. _____

viii. _____

ix. _____

x. _____

4. Write five 3 phonetic sounds

i. _____

ii. _____

iii. _____

iv. _____

v. _____

5. Identify and say the last sounds of these objects











6. Circle the consonant sounds in the following

A B C D E F G H I J K L M

N O P Q R S T U V W X Y Z

7. Read the following sentences correctly

The bat is up.

The boy is on the log.

The man can run.

The bag is big.

The kid is wet.

8. Sound and write Aa - Zz

_____	_____	_____	_____	_____	_____	_____
_____	_____	_____	_____	_____	_____	_____
_____	_____	_____	_____	_____	_____	_____
_____	_____	_____	_____			

9. Dictation of three phonetic sounds

i. _____

ii. _____

iii. _____

iv. _____

v. _____

vi. _____

vii. _____

viii. _____

ix. _____

x. _____

EMINENT KIDS MONTESSORI SCHOOL

3, Ezekiel Salako Street, Off Ifedayo Street, Igbobi Estate,
Olope Meji, Mowe, Ogun State.



LEARN AT HOME PACK
(2019-2020 SESSION)

INFANT 1

NAME:

SUBJECT: RHYMES

Recite the following rhymes correctly

i. Goosey Goosey Gander.....

2. I see the moon

3. Early to bed

4. I stand on my tip toes

5. A lion

6. Once I saw a little bird

EMINENT KIDS MONTESSORI SCHOOL

*3, Ezekiel Salako Street, Off Ifedayo Street, Igbobi Estate,
Olope Meji, Mowe, Ogun State.*



**LEARN AT HOME PACK
(2019-2020 SESSION)**

INFANT 1

NAME:

SUBJECT: CREATIVE ART

Answer all questions correctly

(1) Draw these three dimensional shapes

i. Cylinder

ii. Cuboid

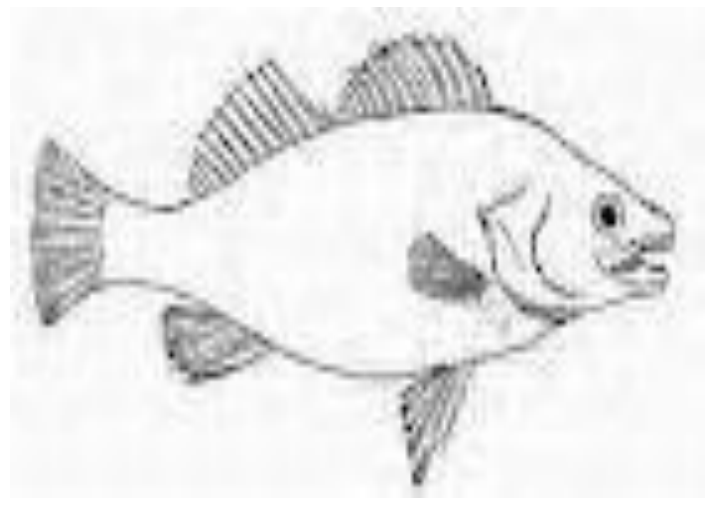
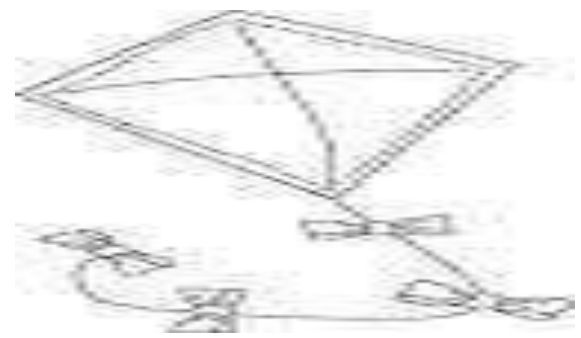

iii. Cone

(2) Mention the secondary colours

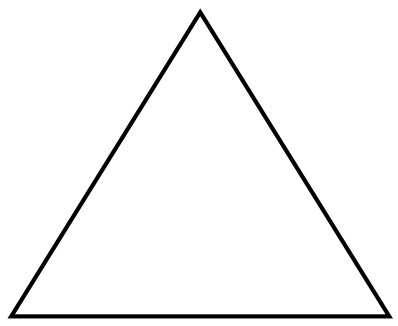
i. _____ ii. _____

iii. _____

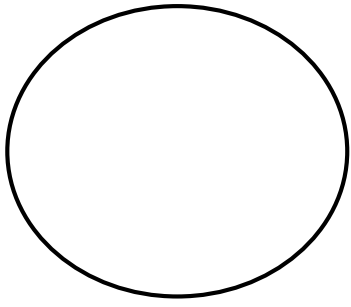
(3) Colour these objects with the secondary colours




(4) Count and write the sides of these shapes.

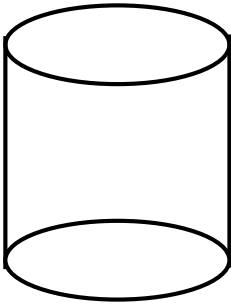


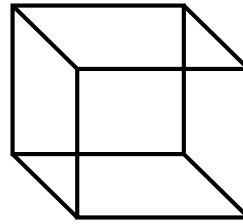





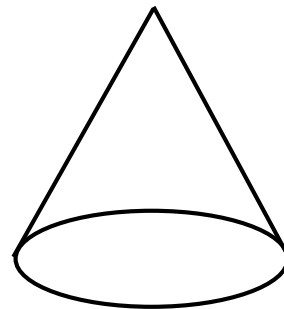


(5) Identify and write the names of these shapes

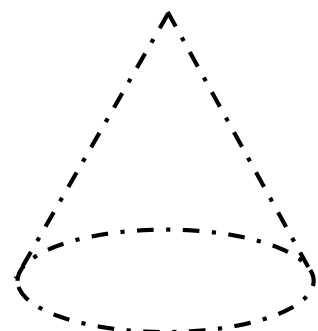
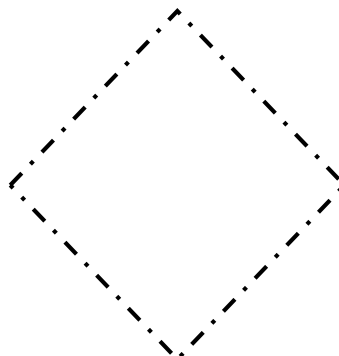
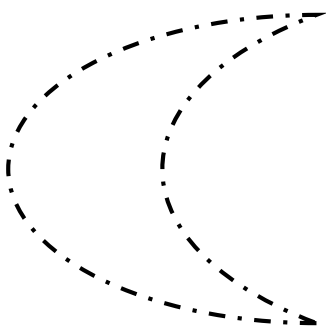








(6) Trace these shapes using the primary colours



EMINENT KIDS MONTESSORI SCHOOL

3, Ezekiel Salako Street, Off Ifedayo Street, Igbobi Estate,
Olope Meji, Mowe, Ogun State.



LEARN AT HOME PACK
(2019-2020 SESSION)

INFANT 1

NAME:

SUBJECT: ELEMENTARY SCIENCE

Answer all questions correctly

PART A

- (1) To be free from danger means (a) honesty (b) safety (c) dangerous
- (2) Playing with sharp objects is a _____ attitude (a) good (b) bad (c) nice
- (3) _____ are those things that are used for making different things (a) materials (b) clothes (c) wears
- (4) Which of these is used for making shelf? (a) rubber (b) wood (c) cotton
- (5) The material used for making gate is (a) wood (b) iron (c) cotton
- (6) The liquid we take in is called (a) petrol (b) kerosene (c) water
- (7) We have _____ sense organs (a) 4 (b) 5 (c) 7
- (8) The sense organ for tasting is the (a) eyes (b) nose (c) tongue
- (9) Which of these can we use to clean our ears? (a) cotton bud (b) nail (c) matches
- (10) _____ is a source of water (a) stream (b) gutter (c) tank 20 marks

PART B

1a. Define Water

b. List four(4) sources of water

i. _____ ii. _____

iii. _____ iv. _____

2a. What does Safety means?

8 marks

b. Mention any four(4) dangerous objects you know

i. _____ ii. _____

iii. _____ iv. _____

3a. Write out the five(5) sense organs

8 marks

i. _____ ii. _____

iii. _____ iv. _____

v. _____

b. List any four(4) parts of human body

i. _____ ii. _____

iii. _____ iv. _____

4a. Define Weather

8 marks

b. Mention the two(2) types of weather we have in Nigeria

i. _____ ii. _____

5a. State four(4) uses of water

8 marks

i. _____

ii. _____

iii. _____

iv. _____

b. Write the materials we use to make the following:

i. Cloth _____

ii. Table _____

iii. Shoe _____

8 marks

EMINENT KIDS MONTESSORI SCHOOL

3, Ezekiel Salako Street, Off Ifedayo Street, Igbobi Estate,
Olope Meji, Mowe, Ogun State.



LEARN AT HOME PACK
(2019-2020 SESSION)

INFANT 1

NAME:

SUBJECT: SOCIAL HABIT

Answer all questions correctly

PART A

- (1) The act of choosing between good and bad is called (a) honesty (b) choice (c) things
- (2) Praying is a ____ choice (a) good (b) bad (c) dirty
- (3) Which of these is a bad habit? (a) greeting (a) reading (c) fighting
- (4) We can use ____ to build house (a) cement (b) pencil (c) eraser
- (5) The part of the house where we receive visitors is the (a) bedroom (b) kitchen (c) sitting room
- (6) I can see a _____ in the bedroom (a) car (b) pot (c) bed
- (7) One of the rooms in the house is the (a) bathroom (b) classroom (c) Diction room
- (8) ____ and ____ can be seen in the bathroom (a) disinfectant, soap (b) chair, broom (c) table, book
- (9) A building where we live is called (a) school (b) shop (c) house
- (10) It is a _____ choice to steal (a) good (b) bad (c) nice 20 MARKS

PART B

1a. What is Choice?

b. Mention four(4) things we should do right as children

i. _____

ii. _____

iii. _____

iv. _____

2a. Define a House 8 MARKS

b. List any four(4) rooms in the house

i. _____ ii. _____

iii. _____ iv. _____

3a. Describe what a Kitchen is 8 MARKS

b. Make a list of four(4) things that can be found in the kitchen

i. _____ ii. _____

iii. _____ iv. _____

4a. List the two(2) types of choice 8 MARKS

i. _____ ii. _____

b. Write out four(4) bad choices we should not make as children

i. _____

ii. _____

iii. _____

iv. _____ 8 MARKS

5a. What is a bathroom?

b. Mention four(4) things you can see in the bathroom

i. _____ ii. _____

iii. _____ iv. _____

8 MARKS

EMINENT KIDS MONTESSORI SCHOOL

*3, Ezekiel Salako Street, Off Ifedayo Street, Igbobi Estate,
Olope Meji, Mowe, Ogun State.*



LEARN AT HOME PACK
(2019-2020 SESSION)

INFANT 1

NAME:

SUBJECT: COMPUTER

Answer all questions correctly

PART A

- (1) Computer is ____ that can do many jobs (a) a busy machine (b) a lazy machine (c) an electronic machine
- (2) One of these is a part of computer (a) monitor (b) rat (c) television
- (3) Computers are used for (a) walking (b) jumping (c) typing
- (4) Computers can also be used for learning (a) true (b) False
- (5) Which of these can be seen on the keyboard? (a) pictures (b) letters (c) shapes
- (6) The computer mouse looks like a (a) rat (b) dog (c) lion
- (7) One of these is the brain of the computer (a) monitor (b) mouse (c) C.P.U
- (8) We use the mouse to (a) types letters (b) play games (c) see what the computer is doing
- (9) How many parts of computer do we have? (a) four (b) two (c) three
- (10) The engine room of a computer is the (a) mouse (b) television (c) system unit

20 MARKS

PART B

1a. Define a computer

b. Mention the four(4) main parts of a computer

i. _____ ii. _____

iii. _____ iv. _____

2a. State two(2) uses of computer

8 MARKS

i. _____

ii. _____

b. A monitor looks like a _____

3a. List four(4) places where computers can be used

8 MARKS

i. _____ ii. _____

iii. _____ iv. _____

b. A system unit looks like a _____

4a. Write out three(3) things you can see on the keyboard

8 MARKS

i. _____ ii. _____

iii. _____

b. List four(4) electronic machines you know

i. _____ ii. _____

iii. _____ iv. _____

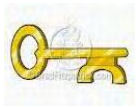
5a. State the uses of these parts of computer

8 MARKS

i. Monitor: _____

ii. Mouse: _____

b. Identify the electronic machines in the following:



8 MARKS

EMINENT KIDS MONTESSORI SCHOOL

3, Ezekiel Salako Street, Off Ifedayo Street, Igbobi Estate,
Olope Meji, Mowe, Ogun State.



LEARN AT HOME PACK
(2019-2020 SESSION)

INFANT 1

NAME:

SUBJECT: HEALTH HABIT

Answer all questions correctly

PART A

- (1) _____ means to be free from danger (a) sense of value (b) safety
- (2) A room where we ease ourselves is called (a) kitchen (b) toilet
- (3) We should always _____ the toilet after use (a) liter (b) flush
- (4) The place where children play is called (a) office (b) playground
- (5) Fire burn is an accident caused by (a) water (b) fire
- (6) Which of these can cause fire burn? (a) bed (b) stove
- (7) _____ objects are harmful to us (a) flat (b) dangerous
- (8) We can see one of these on the playground (a) toys (b) knives
- (9) Allowing elderly people to assist us to cross the road is (a) right
(b) wrong
- (10) We should not walk in the middle of the road (a) true (b) false

PART B

20 MARKS

1a. What is Toilet Habit?

b. Mention four(4) things we can see in the toilet

i. _____ ii. _____

iii. _____ iv. _____

2a. What is Safety?

8 MARKS

b. List any four(4) sharp objects you know

i. _____ ii. _____

iii. _____ iv. _____

3a. What is a Playground?

8 MARKS

b. Mention four(4) things children can play with

i. _____ ii. _____

iii. _____ iv. _____

4a. What is Fire Burn?

8 MARKS

b. Say two(2) causes of fire burn

i. _____

ii. _____

5a. What is Toilet?

8 MARKS

b. Mention any two(2) things we must do before and after using the toilet

i. _____

ii. _____ 8 MARKS

EMINENT KIDS MONTESSORI SCHOOL

3, Ezekiel Salako Street, Off Ifedayo Street, Igbobi Estate,
Olope Meji, Mowe, Ogun State.



LEARN AT HOME PACK
(2019-2020 SESSION)

INFANT 1

NAME:

SUBJECT: MORAL INSTRUCTION

Answer all questions correctly

PART A

- (1) When you do what you are told to do, it means you are (a) honest (b) obedient
- (2) An obedient child will ____ carefully to instructions (a) listen (b) argue
- (3) We can obey our countries by _____ when reciting the National Anthem (a) bending (b) standing straight
- (4) Showing regards to our elders means (a) safety (b) respect
- (5) We can show respect to our teachers by (a) listening attentively in the class (b) playing when they are talking
- (6) ____ is a way of saying the truth at all times (a) honesty (b) prayer
- (7) Standing up for our elders to sit is a way of showing (a) honesty (b) respect
- (8) When we respect our parents, they will ____ us (a) love (b) hate
- (9) Obedience is the act of making noise in the class (a) true (b) false
- (10) We must _____ before complaining (a) argue (b) obey

20 marks

PART B

1a. What is Obedience?

b. List any four(4) school rules we must obey

i. _____

ii. _____

iii. _____

iv. _____

2a. Explain the word "Honesty" 8 marks

b. Give two(2) reasons we need to be honest to people

i. _____

ii. _____

3a. Write out four(4) ways we can show respect to our parents 8 marks

i. _____

ii. _____

iii. _____

iv. _____

b. State two(2) things we must do when reciting the National Anthem

i. _____

ii. _____

4a. Define Respect 8 marks

b. Mention four(4) people we can respect

i. _____ ii. _____

iii. _____ iv. _____

5a. What is Sense of Value? 8 marks

b. List any four(4) things that belong to you

i. _____ ii. _____

iii. _____ iv. _____ 8 marks

EMINENT KIDS MONTESSORI SCHOOL

3, Ezekiel Salako Street, Off Ifedayo Street, Igbobi Estate,
Olope Meji, Mowe, Ogun State.



LEARN AT HOME PACK
(2019-2020 SESSION)

INFANT 1

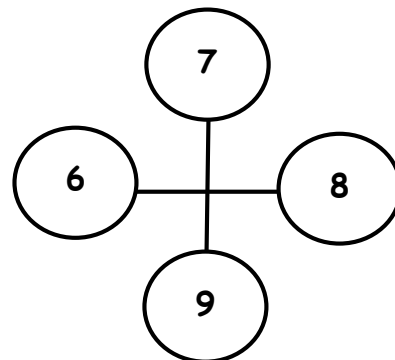
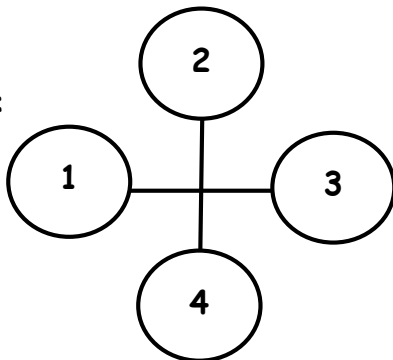
NAME:

SUBJECT: QUANTITATIVE REASONING

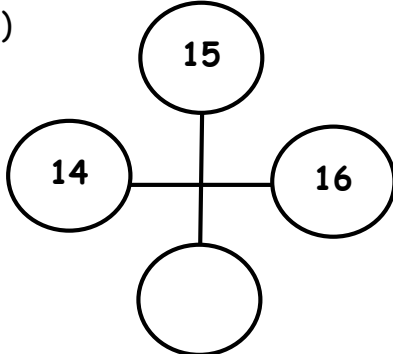
Answer all questions correctly

PART A

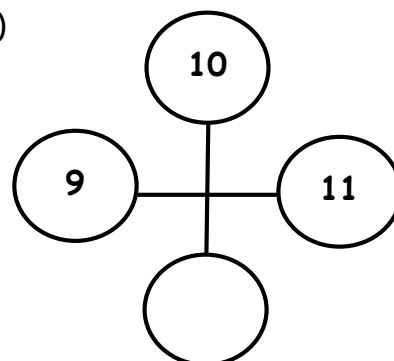
Examples:



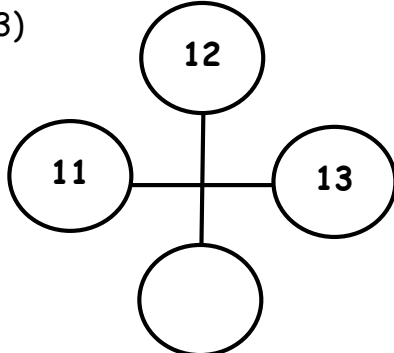
(1)



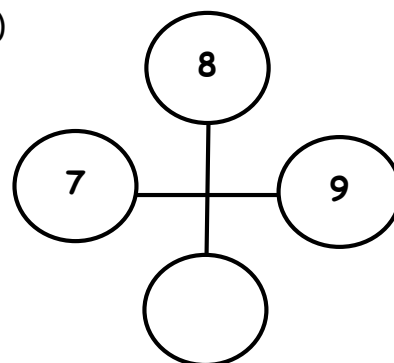
(2)



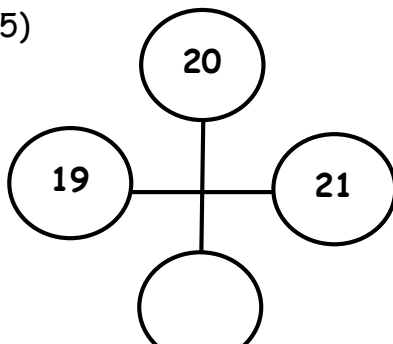
(3)



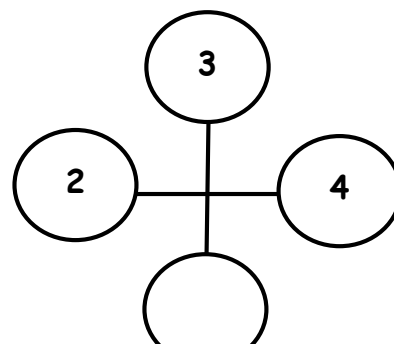
(4)

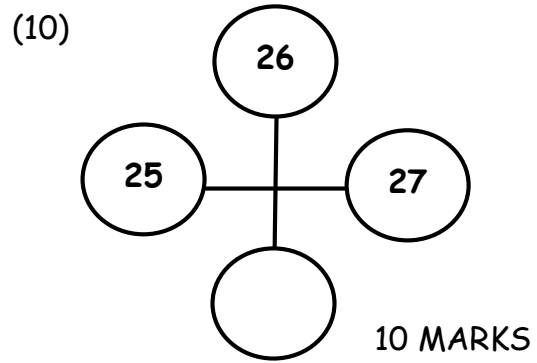
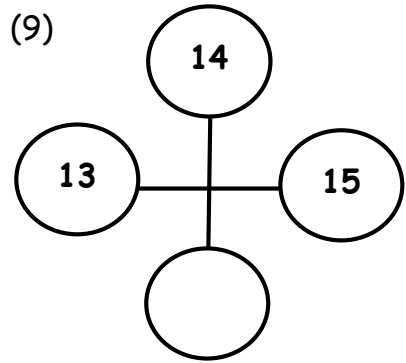
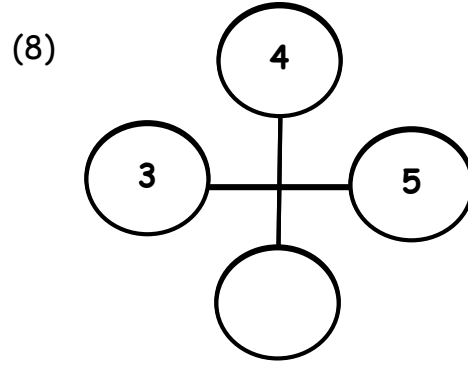
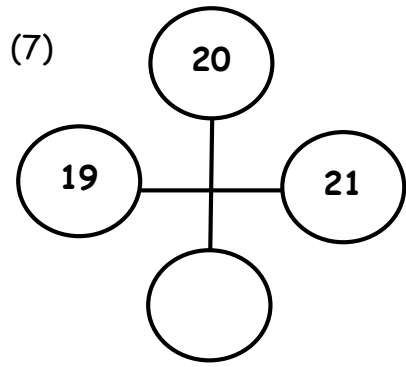


(5)



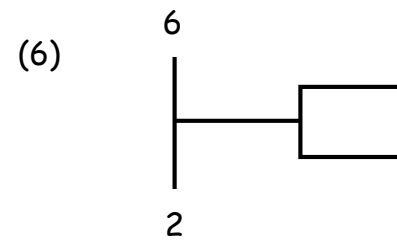
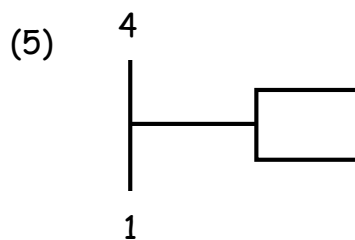
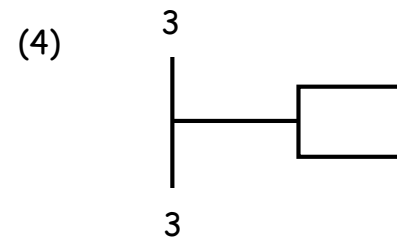
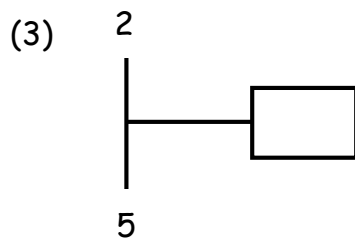
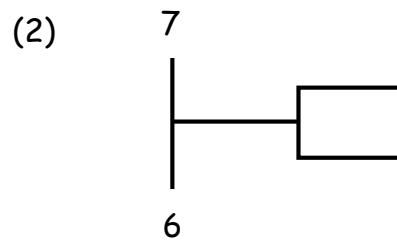
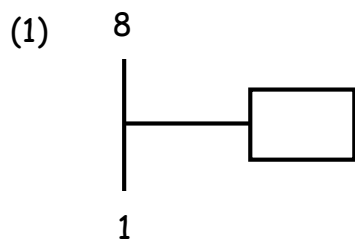
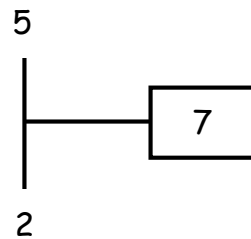
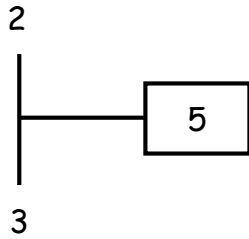
(6)

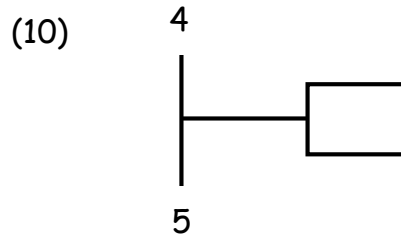
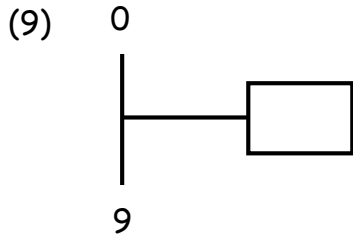
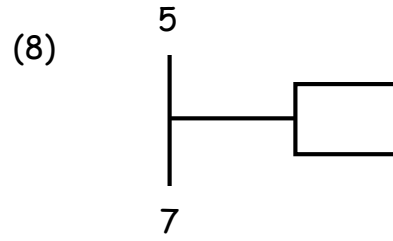
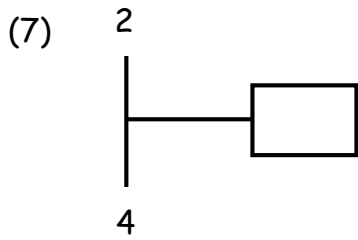




PART B

Examples:





10 MARKS

PART C

A	B	C	D	E	F	G	H	I	J
1	2	3	4	5	6	7	8	9	10

Example: A = 1

(1) F = _____

(2) C = _____

(3) I = _____

(4) A = _____

(5) D = _____

(6) E = _____

(7) B = _____

(8) G = _____

(9) H = _____

(10) J = _____

10 MARKS

PART D

Examples:

4	5
---	---

10	11
----	----

(1)

	14
--	----

(2)

	14
--	----

(3)

9	
---	--

(4)

13		15
----	--	----

(5)

10	11	
----	----	--

(6)

	5	6
--	---	---

(7)

20		22
----	--	----

(8)

	14
--	----

(9)

9	
---	--

(10)

	25
--	----

10 MARKS

PART E

Examples:

1	2	3

6	7	8

(1)

25	26	27

(2)

13	14	15

(3)

19	20	21

(4)

3	4	5

(5)

8	9	10

(6)

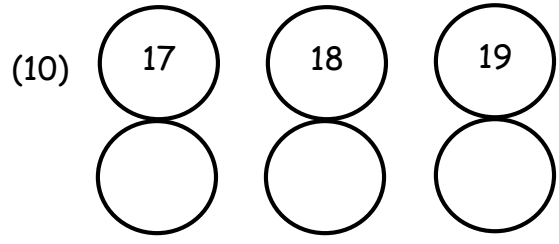
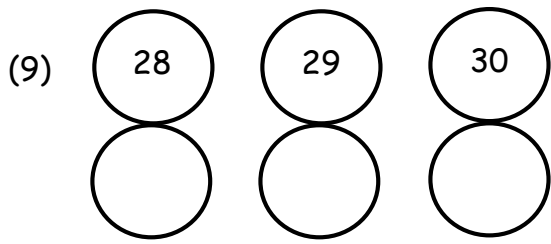
11	12	13

(7)

8	9	10

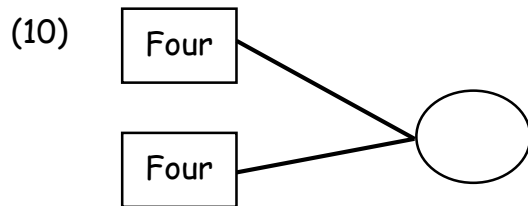
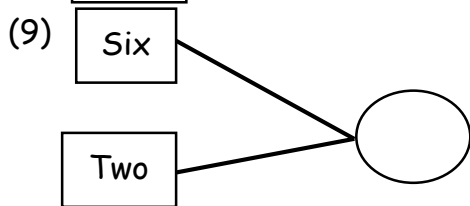
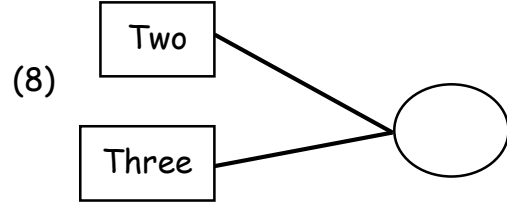
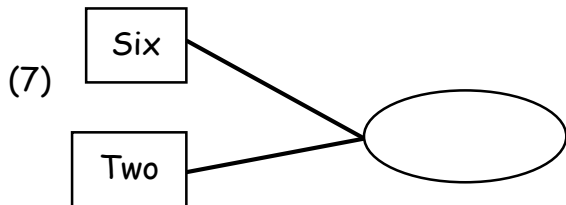
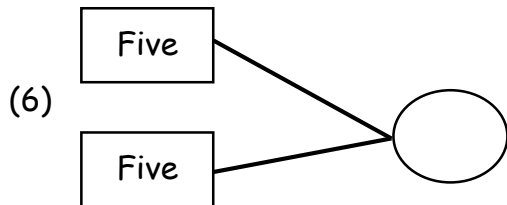
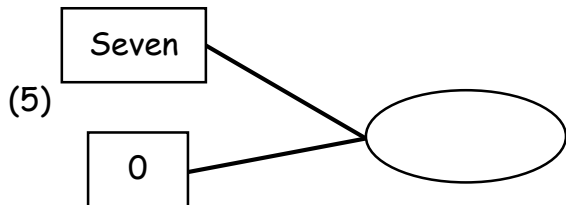
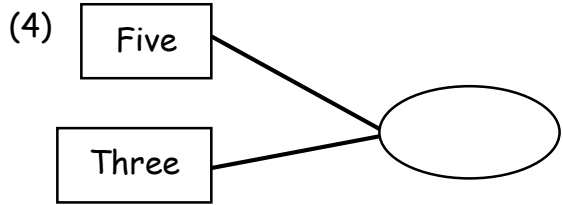
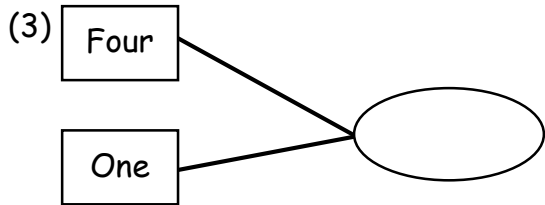
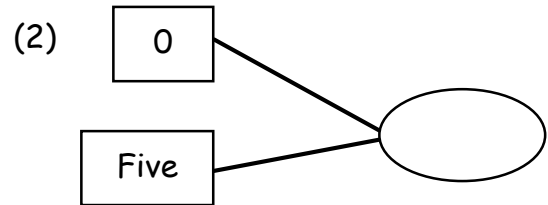
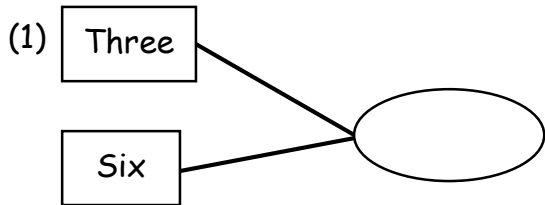
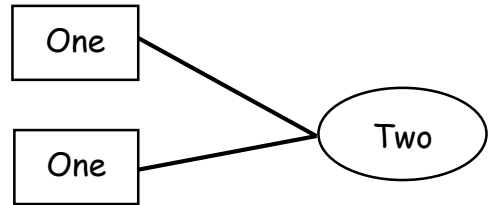
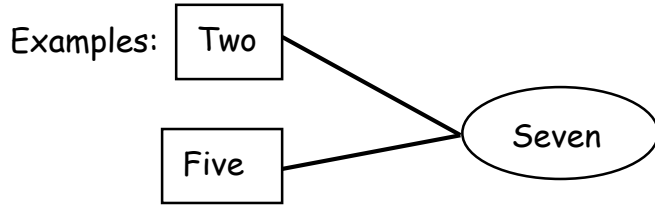
(8)

31	32	33



10 MARKS

PART F



10 MARKS

EMINENT KIDS MONTESSORI SCHOOL

3, Ezekiel Salako Street, Off Ifedayo Street, Igbobi Estate,
Olope Meji, Mowe, Ogun State.



LEARN AT HOME PACK
(2019-2020 SESSION)

INFANT 1

NAME:

SUBJECT: VERBAL REASONING

Answer all questions correctly

(1) Examples: B + E = BE

I + S = IS

i. S + O = _____

ii. M + E = _____

iii. A + S = _____

iv. N + O = _____

iv. B + E = _____

vi. G + O = _____

vii. T + O = _____

viii. O + F = _____

ix. I + T = _____

x. D + O = _____

(2) Re-write these words

Examples: ta → at

i. na → _____

ii. od → _____

iii. xo → _____

iv. ti → _____

v. og → _____

iv. et → _____

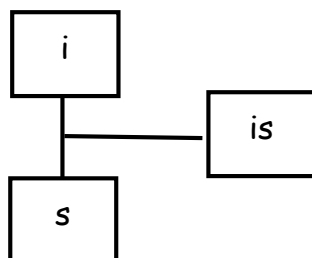
vii. pu → _____

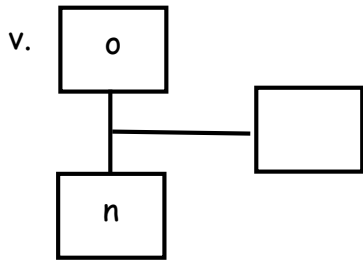
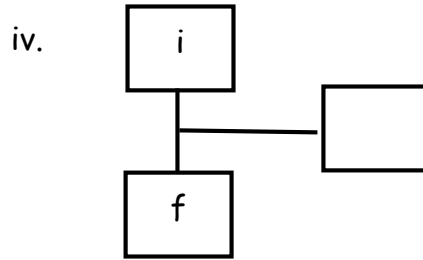
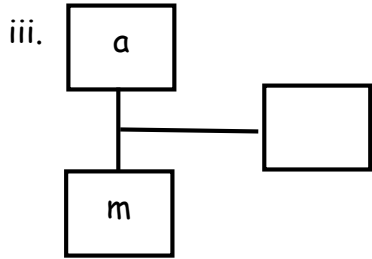
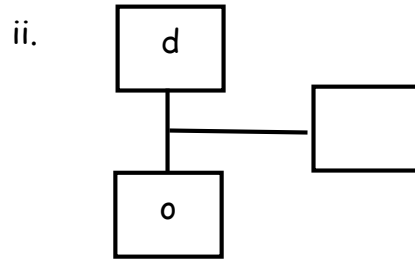
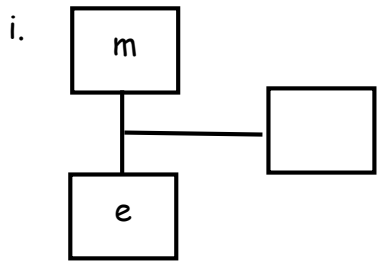
viii. on → _____

ix. fi → _____

x. ot → _____

(3) Example:





(4) Match each word to the first sound

i.

Pigeon
Hat
Cup

ii.

Plate
Hammer
lemon

iii.

Bag
Pen
Ball










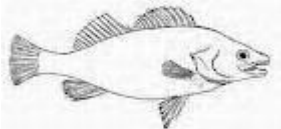
iv.

Hoe
Ballon
Pineapple

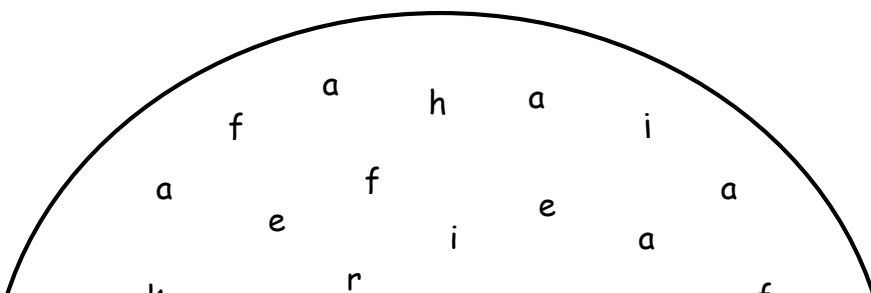
v.

Cup
Plate
House

(5) Match the sounds with their correct objects

Aa	
Bb	
Cc	
Dd	
Ee	
Ff	
Gg	
Hh	
Ii	
Jj	

(6) Circle small sound owing



EMINENT KIDS MONTESSORI SCHOOL

3, Ezekiel Salako Street, Off Ifedayo Street, Igbobi Estate,
Olope Meji, Mowe, Ogun State.



LEARN AT HOME PACK
(2019-2020 SESSION)

INFANT 1

NAME:

SUBJECT: PHONICS

Answer all questions correct

(1) Write five(5) words on digraph "oo" e.g Moon

i. _____ ii. _____

iii. _____ iv. _____

v. _____

(2) Write five(5) words on digraph "or" e.g tore

i. _____ ii. _____

iii. _____ iv. _____

v. _____

(3) Write five(5) words on each of these sounds

"ee" e.g. leep	ai e.g.tail
1.	1.
2.	2.
3.	3.
4.	4.
5.	5.

(4) Write ten(10) sight words


- i. _____
- ii. _____
- iii. _____
- iv. _____
- v. _____
- vi. _____
- vii. _____
- viii. _____
- ix. _____
- x. _____

(5) Write five 3 Phonetic sound

- i. _____
- ii. _____
- iii. _____
- iv. _____
- v. _____

(6) Write the first sound of the following objects











EMINENT KIDS MONTESSORI SCHOOL

*3, Ezekiel Salako Street, Off Ifedayo Street, Igbobi Estate,
Olope Meji, Mowe, Ogun State.*



**LEARN AT HOME PACK
(2019-2020 SESSION)**

INFANT 1

NAME:

SUBJECT: PRACTICAL LIFE

DEMONSTRATE HOW TO DO THE FOLLOWING

1. Demonstrate how to serve an elderly person water.
2. Demonstrate how to open and close a bottle.
3. Demonstrate how to roll and unroll a mat.
4. Demonstrate how to tuck in your shirt.
5. Demonstrate how to greet in the afternoon.
6. Demonstrate how to arrange books in the shelf.

EMINENT KIDS MONTESSORI SCHOOL

3, Ezekiel Salako Street, Off Ifedayo Street, Igbobi Estate,
Olope Meji, Mowe, Ogun State.



LEARN AT HOME PACK
(2019-2020 SESSION)

YEAR 2

NAME:

SUBJECT: HANDWRITING

A mango is a fruit.

Handwriting practice lines consisting of multiple sets of horizontal red lines for tracing and independent writing.

The sun rises in the east.

Handwriting practice lines consisting of 20 horizontal red lines.