

EMINENT KIDS MONTESSORI SCHOOL

3, Ezekiel Salako Street, Off Ifedayo Street, Igbobi Estate,
Olope Meji, Mowe, Ogun State.



LEARN AT HOME PACK
(2019-2020 SESSION)

INFANT 2

NAME:

SUBJECT: NUMERACY

Answer all questions correctly

(1) Do these simple addition and subtraction

$$\begin{array}{r} \text{i. T} \quad \quad \text{U} \\ 3 \quad \quad 4 \\ - 2 \quad \quad 4 \\ \hline \end{array}$$

$$\begin{array}{r} \text{ii. T} \quad \quad \text{U} \\ 7 \quad \quad 3 \\ - 1 \quad \quad 2 \\ \hline \end{array}$$

$$\begin{array}{r} \text{iii. T} \quad \quad \text{U} \\ 4 \quad \quad 9 \\ + 1 \quad \quad 0 \\ \hline \end{array}$$

$$\begin{array}{r} \text{iv. T} \quad \quad \text{U} \\ 7 \quad \quad 5 \\ - 3 \quad \quad 1 \\ \hline \end{array}$$

$$\begin{array}{r} \text{v. T} \quad \quad \text{U} \\ 3 \quad \quad 7 \\ - 3 \quad \quad 6 \\ \hline \end{array}$$

$$\begin{array}{r} \text{vi. T} \quad \quad \text{U} \\ 6 \quad \quad 0 \\ + 0 \quad \quad 4 \\ \hline \end{array}$$

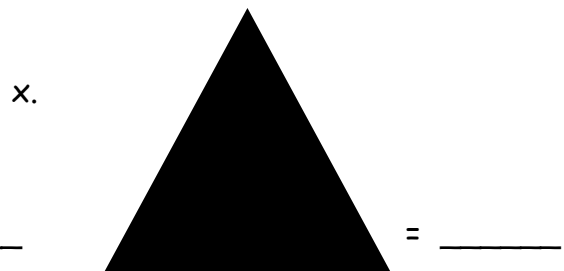
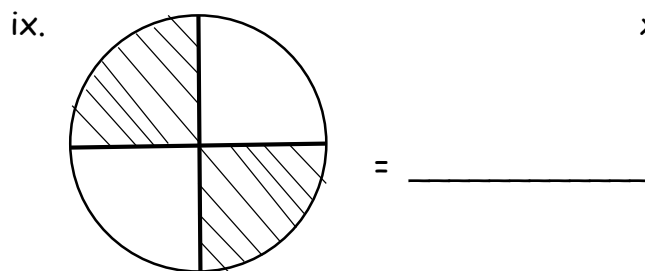
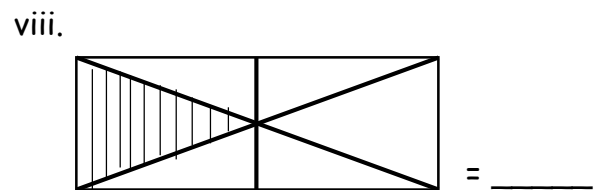
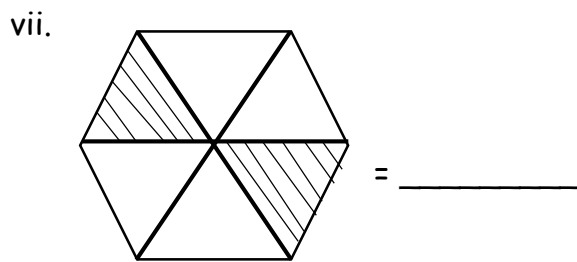
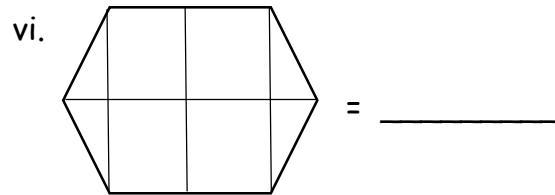
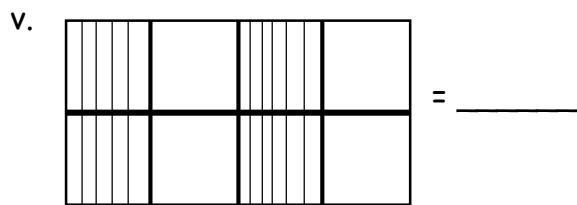
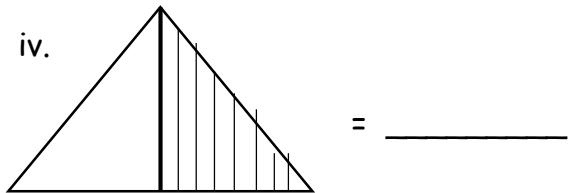
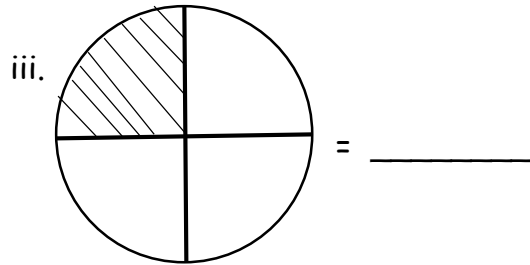
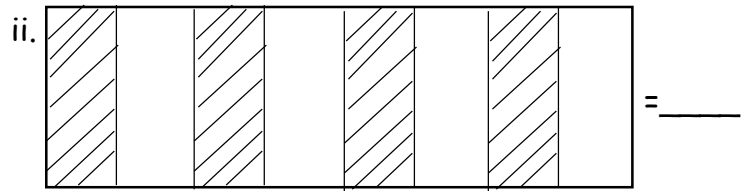
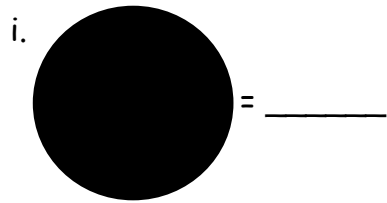
$$\begin{array}{r} \text{vii. T} \quad \quad \text{U} \\ 3 \quad \quad 8 \\ - 0 \quad \quad 6 \\ \hline \end{array}$$

$$\begin{array}{r} \text{viii. T} \quad \quad \text{U} \\ 6 \quad \quad 0 \\ + 0 \quad \quad 9 \\ \hline \end{array}$$

$$\begin{array}{r} \text{ix. T} \quad \quad \text{U} \\ 2 \quad \quad 2 \\ - 1 \quad \quad 2 \\ \hline \end{array}$$

$$\begin{array}{r} \text{x. T} \quad \quad \text{U} \\ 3 \quad \quad 6 \\ + 1 \quad \quad 3 \\ \hline \end{array}$$

(2) Write the fraction of the shaded parts of these shapes



(3) Write the following numbers in words

i. 52 =

ii. 89 =

iii. 50 =

iv. 19 =

v. 74 =

Write these numbers in figures

vi. Fifteen =

vii. Thirty seven =

viii. Fifty five =

ix. Sixty eight =

x. Forty six =

xi. Thirteen =

(4) Compare the following numbers using greater than (>), less than (<) or equal to (=) signs

i. 18 16

ii. $2 + 5$ $1 + 6$

iii. $6 + 2$ $4 + 4$

iv. $12 + 8$ $10 + 10$

v. 104 98

(5) Count the following numbers backward

i. 46 _____

ii. 38 _____

iii. 65 _____

iv. 23 _____

v. 52 _____

vi. 72 _____

vii. 31 _____

viii. 11 _____

ix. 18 _____

x. 9 _____

(6) Count and write number 401 - 500

Dictation of numbers from 400 - 500

(1)

(2)

(3)

(4)

(5)

EMINENT KIDS MONTESSORI SCHOOL

3, Ezekiel Salako Street, Off Ifedayo Street, Igbobi Estate,
Olope Meji, Mowe, Ogun State.



LEARN AT HOME PACK
(2019-2020 SESSION)

INFANT 2

NAME:

SUBJECT: LITERACY

Answer all questions correctly

PART A

Read this passage carefully and answer the questions that follow

COMPREHENSION PASSAGE

Simbi is a girl. She stays with her uncle in Kano. During holidays, she travels to Abuja to spend her holiday with her parents. She loves the beauty of Abuja-Kano road very much.

There are beautiful rocks and high hills on both sides of the road.

Simbi wonders how trees can grow on some of the mountains. Sometimes, Simbi is unhappy at the sight of accidents on this road.

QUESTIONS

(1) Where does Simbi's uncle live? _____

(2) When does Simbi go to Abuja? _____

(3) What can she see on both sides of the road? _____

(4) Why is Simbi sometimes unhappy? _____

(5) Is Simbi a boy or a girl? _____

PART B

Fill the gaps in the following sentences with 'a' or 'an'

- i. We saw _____ elephant in the zoo.
- ii. The hen laid _____ egg.
- iii. She has _____ bag and _____ umbrella.
- iv. I need _____ orange please.
- v. See _____ ant on the floor.
- vi. Are you _____ boy or _____ girl?
- vii. There is _____ elephant in the forest.
- viii. My uncle gave me _____ apple yesterday.
- ix. The police men arrested _____ thief.
- x. Just give me _____ hour

Identify the objects below carefully and write out their names.











Complete the table below

SINGULAR	PLURAL
1. Pencil	
2.	Roofs
3. Mat	
4. Book	
5.	Shoes

Circle the correct plurals of the underlined words in the sentences below.

- (6) The table are in the classroom (a) tablies (b) tables
- (7) The egg are packed in a crate (a) eggs (b) egges
- (8) We drink water everyday (a) waters (b) water
- (9) The monkey eat a lot of banana. (a) monkeys (b) monkies
- (10) Seven of the man are doctors (a) men (b) mans

Read the passage below carefully

This is our house.

We have different rooms.

There are bedrooms, sitting room, bathroom, kitchen and toilet.

We always watch films in the sitting room.

PART C

Write a composition on the topic "MYSELF"

DICTIONARY

- (1) _____ (2) _____
(3) _____ (4) _____
(5) _____

EMINENT KIDS MONTESSORI SCHOOL

3, Ezekiel Salako Street, Off Ifedayo Street, Igbobi Estate,
Olope Meji, Mowe, Ogun State.



LEARN AT HOME PACK
(2019-2020 SESSION)
INFANT 2

NAME:

SUBJECT: MORAL INSTRUCTION

Answer all questions correctly

PART A

- (1) We can say thank you to people when we are (a) flogged (b) given gifts
- (2) Who amongst these should we obey? (a) our animals (b) our elders
- (3) Our teachers in the school are also our elders (a) true (b) false
- (4) Talking while eating is a ____ habit (a) bad (b) good
- (5) The act of doing something together is called (a) kindness (b) co-operation
- (6) To be good to people means (a) disobedience (b) kindness
- (7) The red light of the traffic light means (a) go (b) ready
- (8) When we do things together, the work will be (a) faster and easier (b) difficult and slow
- (9) What should you say to a classmate sitting on your seat (a) get up (b) excuse me please
- (10) When we talk with food in our mouth, it shows we lack (a) senses (b) self-control

20 MARKS

PART B

1a. What is Good Manner?

b. Write out four(4) words that show good manner

i. _____ ii. _____

iii. _____ iv. _____

2a. Briefly explain the word "Kindness" 8 MARKS

b. Mention four(4) people we can show kindness to

i. _____ ii. _____

iii. _____ iv. _____

3a. Define Obedience 8 MARKS

b. List four(4) people we should obey

i. _____ ii. _____

iii. _____ iv. _____

4a. Describe when we are to say 'sorry' 8 MARKS

b. When are we to use the words "Pardon Me?"

5a. What is Co-operation? 8 MARKS

b. Mention four(4) people we must show co-operation to

i. _____ ii. _____

iii. _____ iv. _____

8 MARKS

EMINENT KIDS MONTESSORI SCHOOL

3, Ezekiel Salako Street, Off Ifedayo Street, Igbobi Estate,
Olope Meji, Mowe, Ogun State.



LEARN AT HOME PACK
(2019-2020 SESSION)

INFANT 2

NAME:

SUBJECT: HEALTH EDUCATION

Answer all questions correctly

PART A

- (1) We can take good care of the school compound by (a) littering the ground
(b) by picking the dirt on the floor
- (2) Which of these can children play with? (a) toys (b) blades
- (3) Eating food that contains balanced diet can make us (a) sick (b) healthy
- (4) We can take care of ourselves by (a) brushing our teeth regularly (b)
wearing dirty clothes
- (5) It is good to be _____ to people (a) kind (b) wicked
- +5(6) Cleanliness is a way of keeping ourselves neat and tidy (a) true (b) false
- (7) People that help us to tidy our schools are called (a) paper (b) cleaner
- (8) _____ is a way of showing respect and love to people (a) greeting (b)
cleanliness
- (9) We can maintain good habit by being (a) unkind (b) friendly
- (10) Cleanliness is next to (a) Godliness (b) sickness

PART B

20 MARKS

1a. Define Cleanliness

b. Mention two(2) ways we can take care of our home

i. _____

ii. _____

2a. List any four(4) things that can cause illness 8 MARKS

i. _____ ii. _____

iii. _____ iv. _____

b. Mention two(2) places children can play

i. _____ ii. _____

3a. State two(2) ways we can maintain good social habit 8 MARKS

i. _____

ii. _____

b. Write out four(4) ways we can take care of the school compound

i. _____

ii. _____

iii. _____

iv. _____

4a. List any four(4) things children can play with 8 MARKS

i. _____ ii. _____

iii. _____ iv. _____

b. State two(2) ways we can take care of ourselves

i. _____

ii. _____

5a. Write out four(4) things that can make us grow well 8 MARKS

i. _____ ii. _____

iii. _____ iv. _____

b. Mention four(4) things children must not play with

i. _____ ii. _____

iii. _____ iv. _____

8 MARKS

EMINENT KIDS MONTESSORI SCHOOL

3, Ezekiel Salako Street, Off Ifedayo Street, Igbobi Estate,
Olope Meji, Mowe, Ogun State.



LEARN AT HOME PACK
(2019-2020 SESSION)

INFANT 2

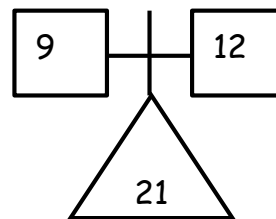
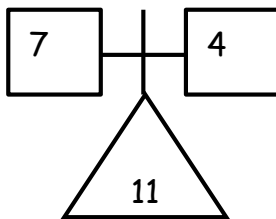
NAME:

SUBJECT: QUANTITATIVE REASONING

Answer all questions correctly

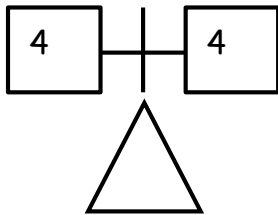
PART A

Examples:

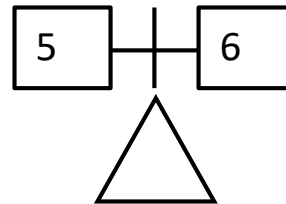


Do these:

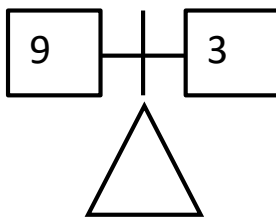
(1)



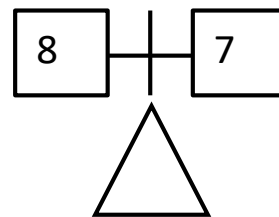
(2)



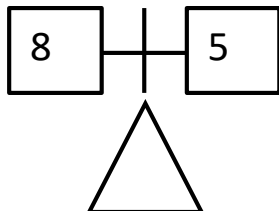
(3)



(4)



(5)



10 MARKS

PART B

Fill in the following gaps and write out the correct figure.

(1) Se_____ nteen = _____

(2) Twent_____ Thr_____ = _____

(3) Ele_____en = _____

(4) T_____enty _____ive = _____

(5) Thir_____y ni_____ = _____ 10 MARKS

PART C

Write the Roman numerals of the following numbers

(1) 7 = _____

(2) 9 = _____

(3) 2 = _____

(4) 10 = _____

(5) 13 = _____

(6) 5 = _____

(7) 14 = _____

(8) 8 = _____

(9) 3 = _____

(10) 6 = _____

10 MARKS

PART D

Circle the biggest numbers in the following

1. 69 44 11 14

2. 143 99 44 12

3. 56 12 122 88

4. 88 65 74 93

5. 99 104 178 49

6. 37 137 73 173

7. 50 55 5 155

- | | | | | |
|-----|-----|-----|-----|-----|
| 8. | 18 | 81 | 118 | 108 |
| 9. | 23 | 25 | 24 | 26 |
| 10. | 103 | 123 | 132 | 13 |

10 MARK

PART E

Write the following numbers in words

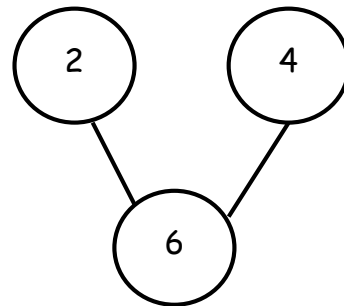
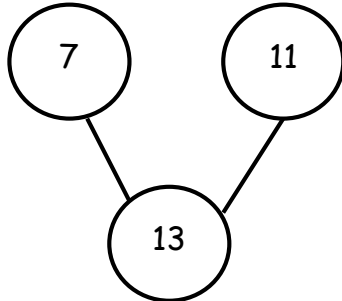
- | | |
|----------------|-----------------|
| (1) 13 = _____ | (2) 10 = _____ |
| (3) 7 = _____ | (4) 5 = _____ |
| (5) 4 = _____ | (6) 8 = _____ |
| (7) 11 = _____ | (8) 3 = _____ |
| (9) 5 = _____ | (10) 15 = _____ |

10 MARKS

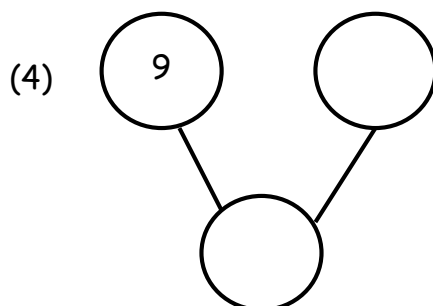
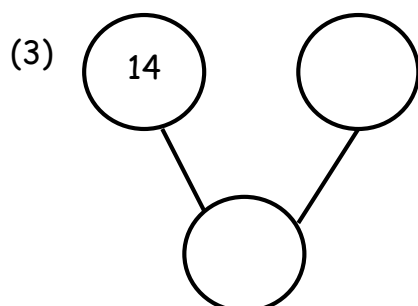
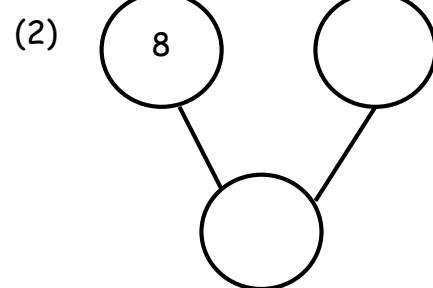
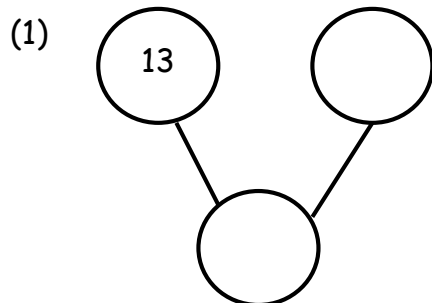
PART F

Fill in the shapes below with odd and even numbers.

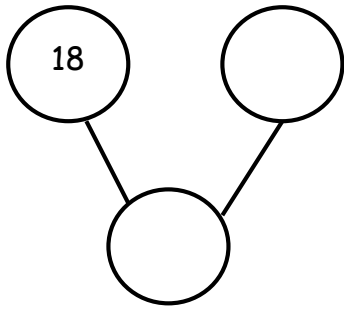
Examples:



Do these:



(5)



10 MARKS

EMINENT KIDS MONTESSORI SCHOOL

3, Ezekiel Salako Street, Off Ifedayo Street, Igbobi Estate,
Olope Meji, Mowe, Ogun State.



LEARN AT HOME PACK
(2019-2020 SESSION)

INFANT 2

NAME:

SUBJECT: VERBAL REASONING

Answer all questions correctly

(1) Arrange the following in alphabetical order

Example: KJ = JK

i. DC = _____

ii. WV = _____

iii. ON = _____

iv. ZY = _____

v. CB = _____

vi. HG = _____

vii. TS = _____

viii. QP = _____

ix. VU = _____

x. FE = _____

(2) Fill each gap to make a word that stands for the pictures below.



i. _____og



ii. eg_____



iii. _____am




iv. _____ite



v. C____t



vi. _____all



(3) Write out the vowels in the following words.

i. Clock → _____

ii. Way → _____

iii. Egg → _____

iv. Bus → _____

v. Ink → _____

vi. Ugly → _____

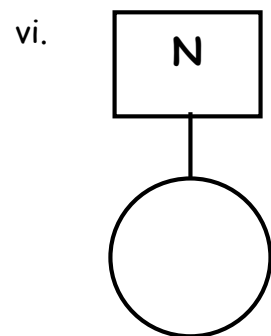
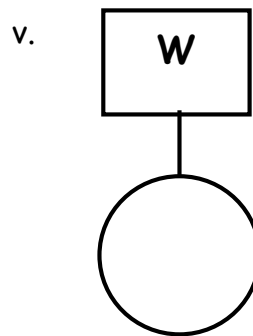
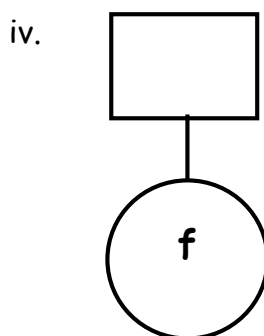
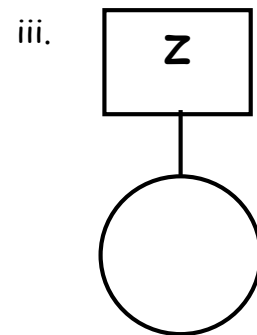
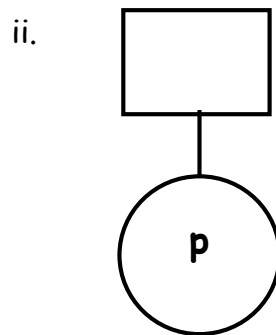
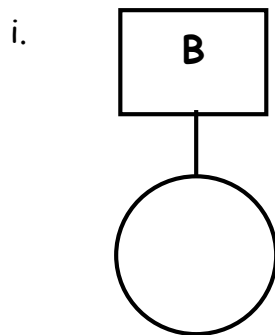
vii. Orange → _____

viii. Sun → _____

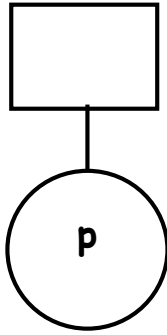
ix. Moon → _____

x. Bee → _____

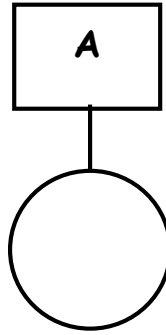
(4) Fill in the missing sounds with either capital sound or small sound. Capital sounds in the boxes, small sounds in the circles.



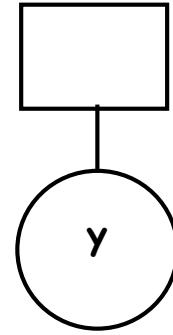
vii.



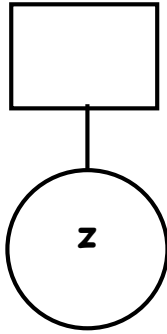
viii.



ix.



x.



(5) Word Making

Example; A + N + T = ANT

i. O + L + D = _____

ii. D + A + Y = _____

iii. G + O + D = _____

iv. W + A + S = _____

v. A + L + L = _____

vi. F + O + R = _____

vii. T + W + O = _____

viii. J + O + B = _____

ix. P + A + Y = _____

x. A + R + M = _____

(6) Letter and number

A	B	C	D	E	F	G	H	I	J	K	L	M
1	2	3	4	5	6	7	8	9	10	11	12	13
N	O	P	Q	R	S	T	U	V	W	X	Y	Z
14	15	16	17	18	19	20	21	22	23	24	25	26

Use the information above to answer the questions.

Example: A T = 1, 20

C A T = 3 1 2

Do these:

i. $G O = \underline{\quad} \underline{\quad}$

ii. $S H E = \underline{\quad} \underline{\quad}$

iii. $B U S = \underline{\quad} \underline{\quad}$

iv. $T O = \underline{\quad} \underline{\quad}$

v. $19 \quad 15 = \underline{\quad} \underline{\quad}$

vi. $19 \quad 9 \quad 24 = \underline{\quad} \underline{\quad}$

vii. $2 \quad 1 \quad 7 = \underline{\quad} \underline{\quad} \underline{\quad}$

viii. $4 \quad 15 \quad 7 = \underline{\quad} \underline{\quad} \underline{\quad}$

ix. $2 \quad 21 \quad 19 = \underline{\quad} \underline{\quad} \underline{\quad}$

x. $B \quad E = \underline{\quad} \underline{\quad}$

EMINENT KIDS MONTESSORI SCHOOL

3, Ezekiel Salako Street, Off Ifedayo Street, Igbobi Estate,
Olope Meji, Mowe, Ogun State.



LEARN AT HOME PACK
(2019-2020 SESSION)

INFANT 2

NAME:

SUBJECT: COMPUTER

Answer all questions correctly

PART A

- (1) The _____ is used to listen to sound on the computer (a) speaker (b) keyboard
- (2) Which of these is the printer used for? (a) to print (b) to paste papers
- (3) Another name for printer is (a) sub roofer (b) stick
- (4) Which of these looks like a printer, but uses large paper to print beautiful pictures? (a) plotter (b) trackball
- (5) The full meaning of UPS is (a) Unlimited Power Supply (b) Uninterrupted Power Supply
- (6) Which of these is placed on a scanner when sending pictures into the computer? (a) charts (b) pictures
- (7) One of these can be used to send pictures into the computer system (a) scanner (b) printer
- (8) One of these is used to write on the computer screen (a) pencil (b) light pen
- (9) The computer system has _____ parts (a) 4 (b) 7
- (10) The plotter is used to print _____ papers (a) small (b) big

PART B

1a. List four(4) other parts of computer

i. _____ ii. _____

iii. _____ iv. _____

b. What are track balls used for?

2. State the use of the following parts of computer

8 MARKS

i. Speaker: _____

ii. Scanner: _____

iii. Plotter: _____

iv. Mouse: _____

3a. Mention four(4) things a computer can do

8 MARKS

i. _____

ii. _____

iii. _____

iv. _____

b. Who is referred to as the father of computer?

4a. Circle the letters that form the word computer

8 MARKS

A B C D E F G H I J K L M

N O P Q R S T U V W X Y Z

b. Name the types of printer

i. _____

ii. _____ 8 MARKS

5a. Write four(4) places where computer system can be used

i. _____ ii. _____

iii. _____ iv. _____

b. Give four(4) examples of electronic machine

i. _____ ii. _____

iii. _____ iv. _____

8 MARKS

EMINENT KIDS MONTESSORI SCHOOL

3, Ezekiel Salako Street, Off Ifedayo Street, Igbobi Estate,
Olope Meji, Mowe, Ogun State.



LEARN AT HOME PACK
(2019-2020 SESSION)
INFANT 2

NAME:

SUBJECT: SOCIAL NORMS

PART A

Answer all questions correctly

- (1) (1) A place where cooking takes place is called (a) bedroom (b) kitchen
- (2) ___ and ___ can be found in the bathroom (a) soap, sponge (b) stove, pot
- (3) Where do we take our bath? (a) in the sitting room (b) in the bathroom
- (4) ___ is the act of choosing (a) wrong (b) choice
- (5) We can use ___ in the kitchen (a) pot (b) petrol
- (6) Plates, cups and knives are found in the (a) toilet (b) kitchen
- (7) A child is not to play with one of these objects (a) erasers (b) knives
- (8) We watch television in the (a) kitchen (b) sitting room
- (9) We defecate in the bathroom. (a) yes (b) no
- (10) Our bathroom must be clean always. (a) yes (b) no

20 MARKS

PART B

1a. What does it mean to do Right?

b. Mention four(4) things you can do right as children

i. _____

ii. _____

iii. _____

iv. _____

2a. Define Choice

8 MARKS

b. List two(2) choices we can make

i. _____

ii. _____

3a. Define a bathroom

8 MARKS

b. List four(4) things you can see in the bathroom

i. _____ ii. _____

iii. _____ iv. _____

4a. What is a Kitchen?

8 MARKS

b. Mention any four(4) objects used in the kitchen

i. _____ ii. _____

iii. _____ iv. _____

5a. Fair means

8 MARKS

b. How do we keep our toilets and bathroom clean for visitors?

8 MARKS

EMINENT KIDS MONTESSORI SCHOOL

3, Ezekiel Salako Street, Off Ifedayo Street, Igbobi Estate,
Olope Meji, Mowe, Ogun State.



LEARN AT HOME PACK
(2019-2020 SESSION)

INFANT 2

NAME:

SUBJECT: FINE ART

Answer all questions correctly

Answer the following questions correctly

(1) Mention the three(3) secondary colours

i. _____ ii. _____

iii. _____

(2) Mix the following colours together and write out their results.



i. Red + Blue = _____

ii. Red + Yellow = _____



iii. Blue + Yellow = _____

(3) Draw a bucket and colour it with Green

(4) Draw a cuboid, pyramid and cylinder in the spaces provided below



(5) Draw a cube, cone, diamond and colour them using the primary colours




(6) i. A crescent has how many corners? _____

ii. A rectangle has how many sides? _____


iii. A cylinder has how many sides? _____

iv. A cone has how many corners? _____

(7) Draw a match box and colour it with Orange



(8) Draw a diamond to make kite in the space provided below



EMINENT KIDS MONTESSORI SCHOOL

3, Ezekiel Salako Street, Off Ifedayo Street, Igbobi Estate,
Olope Meji, Mowe, Ogun State.



LEARN AT HOME PACK
(2019-2020 SESSION)

INFANT 2

NAME:

SUBJECT: ELEMENTARY SCIENCE

Answer all questions correctly

PART A

- (1) The condition of the atmosphere at a particular place or time is called (a) materials (b) weather
- (2) Which of these do we use to smell? (a) tongue (b) nose
- (3) One of these is used for hearing (a) ears (b) skin
- (4) We have ____ and ____ types of weather (a) soft, hard (b) cold, hot
- (5) We take care of our skin by (a) applying cream (b) using soap
- (6) Which of these tastes bitter? (a) kolanut (b) honey
- (7) Clothes are made from (a) cotton (b) wood
- (8) We can take care of our tongue by (a) applying Dettol (b) brushing it daily
- (9) We touch with our _____ and feel with the _____ (a) hand, skin (b) hand, tongue
- (10) Our eyes is used for (a) seeing things (b) hearing things

PART B

20 marks

1a. What are Materials?

b. Mention four(4) materials and what they are used for

i. _____

ii. _____

iii. _____

iv. _____

2a. Define weather

8 marks

b. Write out two(2) types of weather you know

i. _____ ii. _____

3a. Write out two(2) ways we can care for our skin

8 marks

i. _____

ii. _____

b. The tongue is used for _____

The ears are used for _____

4a. Write out four(4) things that taste good

8 marks

i. _____ ii. _____

iii. _____ iv. _____

b. Mention two(2) things that taste bitter

i. _____ ii. _____

5a. What does it mean to keep things safe?

8 marks

b. List four(4) materials that we can keep safe

i. _____ ii. _____

iii. _____ iv. _____

8 marks

EMINENT KIDS MONTESSORI SCHOOL

*3, Ezekiel Salako Street, Off Ifedayo Street, Igbobi Estate,
Olope Meji, Mowe, Ogun State.*



LEARN AT HOME PACK
(2019-2020 SESSION)

INFANT 2

NAME:

SUBJECT: RHYMES

Recite the following rhymes correctly

(1) Baa Baa Black Sheep.....

(2) Cock-a-doo-doo-doo.....

(3) There are seven days

(4) Cobbler Cobbler

(5) Hickety Pickety my black hen

(6) My Mother

EMINENT KIDS MONTESSORI SCHOOL

3, Ezekiel Salako Street, Off Ifedayo Street, Igbobi Estate,
Olope Meji, Mowe, Ogun State.



LEARN AT HOME PACK
(2019-2020 SESSION)

INFANT 2

NAME:

SUBJECT: PHONICS

Answer the following questions correctly

(1) Write five words on each of these diagraphs

"qu"	"er"	"ar"	"or"

10 marks

(2) Write five(5) words with 'O' sound and state their meanings

"o"	MEANINGS
1.	
2.	
3.	
4.	
5.	

10 marks

(3) Write five(5) words with 'U' sound and state their meanings

"u"	MEANINGS
1.	
2.	
3.	
4.	
5.	

10 marks

(4) Write out five(5) words on double consonant sounds "CH" and "SH"

"ch"	"sh"
1.	
2.	
3.	
4.	
5.	

10 marks

(5) Complete these word with the correct diagraphs qu, er, ue, sh, ch

- i. ____ oe ii. ____ ip iii. ____ eep iv. Bl ____
v. Cl ____ vi. Tr ____ vii. Fath ____ viii. Sist ____
ix. Wat ____ x. ____ een xi. ____ ick xii. ____ ill
xiii. ____ air xiv. ____ alk xv. ____ icks

10 marks

(6) Match the following words with their meanings

Ant	A food
Apple	A big animal
Ape	A piece of paper used in typing letters
Egg	A fruit
Envelop	An insect

10 marks

EMINENT KIDS MONTESSORI SCHOOL

*3, Ezekiel Salako Street, Off Ifedayo Street, Igbobi Estate,
Olope Meji, Mowe, Ogun State.*



LEARN AT HOME PACK
(2019-2020 SESSION)

INFANT 2

NAME:

SUBJECT: PRACTICAL LIFE

DEMONSTRATE HOW TO DO THE FOLLOWING

1. Demonstrate how to lock and unlock a padlock.
2. Demonstrate how to roll and unroll a mat.
3. Demonstrate how to fold a shirt without button.
4. Demonstrate how to put on your socks and shoe.
5. Demonstrate how to peg clothes.
6. Demonstrate how to arrange books in the shelf.

