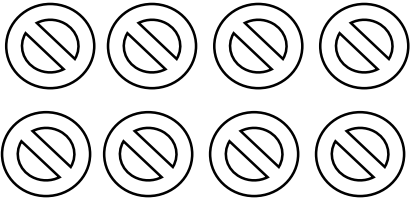
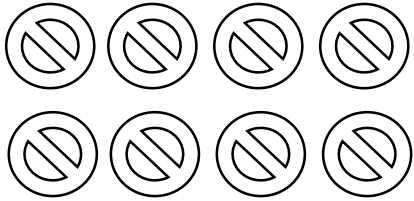








Add up the following sets together

1.  +  =



2.  +  =



3.  +  =



4.  +  =



5.  +  =



Do these simple addition

(1) 4 + 4 = _____
 

(2) 5 + 7 = _____
 

(3) 1 + 6 = _____
 






(4) 9 + 6 = _____
 

(5) 10 + 3 = _____
 

Write the END numbers of the following

19 _____ 29 _____ 9 _____

Dictation of numbers from 1 - 35

- (1)  (2)  (3) 
- (4)  (5) 

Match each number to its correct number.

12

14

18

23

15

20

23

11

10

15

20

12

19

18

11

10

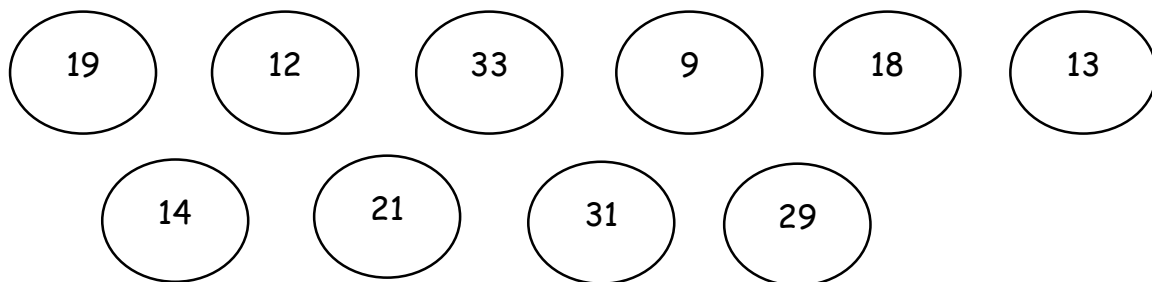
30

30

14

19

Identify the following numbers correctly



EMINENT KIDS MONTESSORI SCHOOL

3, Ezekiel Salako Street, Off Ifedayo Street, Igbobi Estate,
Olope Meji, Mowe, Ogun State.



LEARN AT HOME PACK
(2019-2020 SESSION)

NIDO 2

NAME:

SUBJECT: LITERACY

Sound orally Aa - Zz with demonstration

Aa	Bb	Cc	Dd	Ee	Ff	Gg	Hh	Ii	Jj	Kk	Ll	Mm
Nn	Oo	Pp	Qq	Rr	Ss	Tt	Uu	Vv	Ww	Xx	Yy	Zz

Sound and write Aa - Uu independently

○	○	○	○	○	○	○
○	○	○	○	○	○	○
○	○	○	○	○	○	○

Write small sound a - u

_____	_____	_____	_____	_____	_____	_____
_____	_____	_____	_____	_____	_____	_____
_____	_____	_____	_____	_____	_____	_____

Join these letters to make two sounds

Examples:

L + A =

S + A =

N + E =

F + A =

M + A =

T + I =

Identify the following capital sounds correctly

U P R J M C
Q K L H

Identify the following small sounds correctly

b f o n t p
i g a q

Dictation of sounds from Aa - Uu

(1)

(2)

(3)

(4)

(5)

EMINENT KIDS MONTESSORI SCHOOL

*3, Ezekiel Salako Street, Off Ifedayo Street, Igbobi Estate,
Olope Meji, Mowe, Ogun State.*



LEARN AT HOME PACK
(2019-2020 SESSION)

NIDO 2

NAME:

SUBJECT: RHYMES

Recite the following rhymes correctly

1. Hickety Pickety

2. One, two, three, four, five

3. See, see, see, I can see a bird

4. One, two, buckle

5. Arise O Compatriots

6. I met a little lizard

EMINENT KIDS MONTESSORI SCHOOL

3, Ezekiel Salako Street, Off Ifedayo Street, Igbobi Estate,
Olope Meji, Mowe, Ogun State.



LEARN AT HOME PACK
(2019-2020 SESSION)

NIDO 2

NAME:

SUBJECT: MORAL INSTRUCTION

Answer the following questions correctly

PART A

- (1) _____ is a material used for cleaning (a) napkin (b) bag
 - (2) It is always _____ to show kindness to people (a) good (b) bad
 - (3) Keeping our belongings well means (a) personal belongings (b) sense of value
 - (4) We should always tell _____ at all times (a) lies (b) the truth
 - (5) Children should learn to scatter their things (a) yes (b) no
 - (6) Examples of things used in cleaning the house are (a) broom, mop (b) stone, plate
 - (7) People will love you when you are truthful (a) yes (b) no
 - (8) We can show respect to Nigeria when reciting the National Anthem by (a) bending (b) standing straight
 - (9) We should greet our parents every morning when we wake up from sleep.
(a) yes (b) no
 - (10) What should we say to people when they give us gifts? (a) excuse me
(b) thank you
- 20 marks

PART B

1a. What is Cleanliness?

b. Mention two(2) ways we can keep our surroundings clean

i. _____

ii. _____

2a. Define Honesty

8 marks

b. List two(2) ways we can be honest to our parents

i. _____

ii. _____

3a. What is Greeting?

8 marks

b. Describe how we should greet our mothers in these periods of the day

Morning: _____

Afternoon: _____

4a. Define Kindness

8 marks

b. Write out four(4) people we should show kindness to

i. _____ ii. _____

iii. _____ iv. _____

5a. What is Sense of Value?

8 marks

b. Mention four(4) things you can keep properly as children

i. _____ ii. _____

iii. _____ iv. _____ 8 marks

EMINENT KIDS MONTESSORI SCHOOL

3, Ezekiel Salako Street, Off Ifedayo Street, Igbobi Estate,
Olope Meji, Mowe, Ogun State.



LEARN AT HOME PACK
(2019-2020 SESSION)

NIDO 2

NAME:

SUBJECT: HEALTH HABIT

Answer the following questions correctly

PART A

- (1) _____ is a part of the human body (a) tongue (b) tail
- (2) What is the colour of human hair? (a) green (b) black
- (3) The way we position ourselves is called (a) sense of value (b) posture
- (4) We can take care of our eyes by (a) cleaning the eyes with handkerchief
(b) putting sharp objects into the eyes
- (5) The ear is the sense organ for (a) smelling (b) hearing
- (6) _____ is an examples of bad smell (a) rotten fruits (b) perfume
- (7) We use our eyes to (a) taste things (b) see things
- (8) _____ and _____ can be used to brush the teeth (a) salt, stick (b)
toothpaste, toothbrush
- (9) To be free from danger means (a) cleanliness (b) safety
- (10) We stay healthy when we live in a clean house (a) yes (b) no

20 marks

PART B

1a. What is Safety?

b. Mention two(2) rules we should always follow when crossing the road

i. _____

ii. _____

2a. Say two(2) ways we can take care of our feet

i. _____

ii. _____

b. Mention two(2) things used for washing the teeth

i. _____ ii. _____

3a. What is the eyes are used for?

b. Mention two(2) ways we can care for the eyes

i. _____

ii. _____

4a. Saytwo(2) sharp objects that should not be put in the nostrils

i. _____ ii. _____

b. We must look _____ and _____ before crossing the road.

5. Mention any six(6) parts of the body

i. _____ ii. _____

iii. _____ iv. _____

v. _____ vi. _____

EMINENT KIDS MONTESSORI SCHOOL

3, Ezekiel Salako Street, Off Ifedayo Street, Igbobi Estate,
Olope Meji, Mowe, Ogun State.



LEARN AT HOME PACK
(2019-2020 SESSION)

NIDO 2

NAME:

SUBJECT: COMPUTER

PART A

Answer all questions correctly

- (1) _____ is the brain of the computer (a) CPU (a) monitor
- (2) An electronic device works with (a) chemical (b) electricity
- (3) The room where computers are kept is called (a) library (b) ICT room
- (4) You can see _____ and _____ in the ICT room (a) computers, chairs (b) computers, stoves
- (5) The data we give to the computer are in symbols, numbers and _____ (a) stones (b) letters
- (6) Human beings eat food while computers eat (a) monitor (b) data
- (7) A computer can be used to types letters to our friends (a) yes (b) no
- (8) A CPU looks like a (a) DVD player (b) radio
- (9) We go to the ICT room to (a) play (b) learn
- (10) Computers can be used in schools (a) yes (b) no 20 MARKS

PART B

1a. What is a C.P.U?

b. Mention two(2) places where computers can be used

i. _____ ii. _____ 8 MARKS

2a. Say two(2) things you can see on the monitor i.

_____ ii. _____

b. Mention two(2) things you can see on a keyboard

i. _____ ii. _____

3a. What is an electronic machine?

8 MARKS

b. Name two(2) electronic machines you know

i. _____

ii. _____ 8 MARKS

4a. What is a Computer?

b. Mention four(4) parts of the computer

i. _____ ii. _____

iii. _____ iv. _____

5. Mention the uses of the following

8 MARKS

i. Keyboard: _____

ii. Monitor: _____

iv. Mouse: _____

8 MARKS

EMINENT KIDS MONTESSORI SCHOOL

3, Ezekiel Salako Street, Off Ifedayo Street, Igbobi Estate,
Olope Meji, Mowe, Ogun State.



LEARN AT HOME PACK
(2019-2020 SESSION)

NIDO 2

NAME:

SUBJECT: SOCIAL HABIT

PART A

- (1) Plates, stoves and cups can be found in the (a) bathroom (b) kitchen
- (2) _____ is a place where we cook our food (a) kitchen (b) toilet
- (3) The place where we take our bath is called (a) bedroom (b) bathroom
- (4) You can take care of your bathroom by (a) washing it (a) pouring water on the floor
- (5) One of these can be found in the sitting room (a) television (b) toilet
- (6) _____ is used for cleaning the sitting room (a) broom, mop (b) stick, petrol
- (7) We can take care of our bedroom by (a) putting sand on the bed (a) arranging the room and sweeping it
- (8) An example of the different parts of the house is (a) kitchen (b) outside
- (9) When we do the wrong thing, our parents will punish us (a) yes (b) no
- (10) We don't sleep in the sitting room. (a) yes (b) no 20 marks

PART B

1a. What is Right?

b. Mention two(2) things we can do right

i. _____

ii. _____

2a. What is a House?

8 marks

b. List four(4) rooms in the house

i. _____ ii. _____

iii. _____ iv. _____

3a. What is a Sitting room?

8 marks

b. Mention two(2) ways we can take care of the sitting room

i. _____

ii. _____

4a. Name two(2) things that can be found in the bedroom

8 marks

i. _____ ii. _____

b. What is a bedroom?

5a. What is a kitchen?

8 marks

b. Name our(4) kitchen utensils you know

i. _____ ii. _____

iii. _____ iv. _____ 8 marks

EMINENT KIDS MONTESSORI SCHOOL

3, Ezekiel Salako Street, Off Ifedayo Street, Igbobi Estate,
Olope Meji, Mowe, Ogun State.



LEARN AT HOME PACK
(2019-2020 SESSION)

NIDO 2

NAME:


SUBJECT: FINE ART

PART A


Answer all questions correctly

(1) Identify and write the names of the following shapes correctly

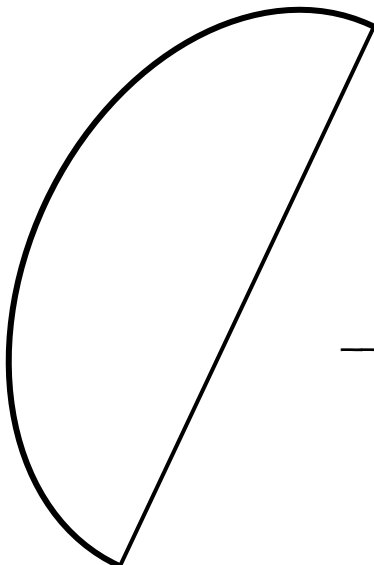
i.




ii.



iii.



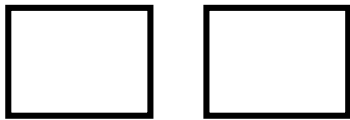
iv.



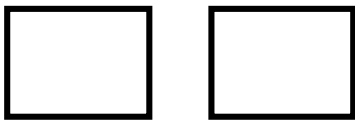
(2) Red + Orange =



Blue + Red =



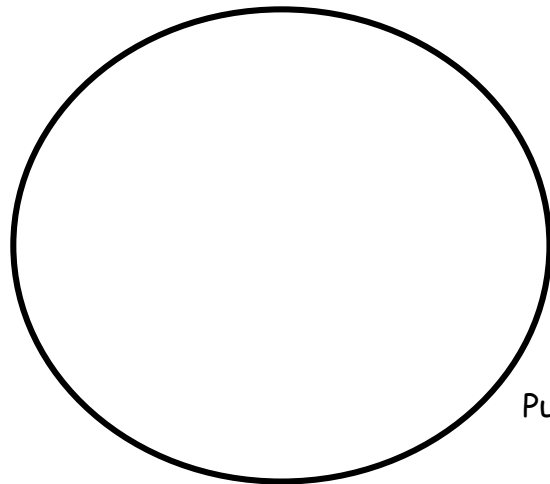
Blue + Yellow =




(3) Colour the following shapes using;



Green

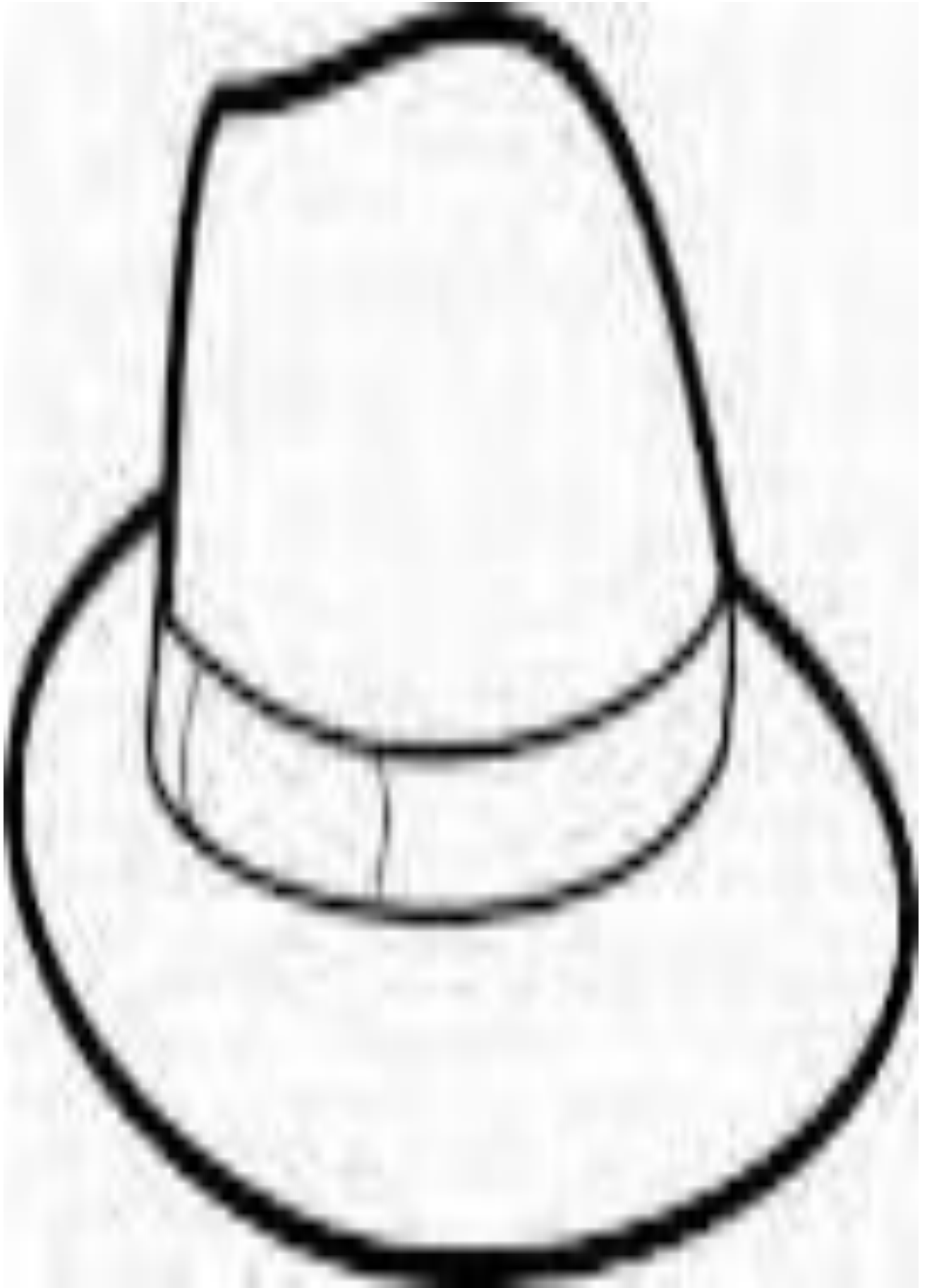


Purple



Orange

Paste on this Hat



EMINENT KIDS MONTESSORI SCHOOL

3, Ezekiel Salako Street, Off Ifedayo Street, Igbobi Estate,
Olope Meji, Mowe, Ogun State.



LEARN AT HOME PACK
(2019-2020 SESSION)

NIDO 2

NAME:

SUBJECT: ELEMENTARY SCIENCE

PART A

Answer all questions correctly

- (1) The condition of the sky everyday is called (a) weather (b) wind
- (2) When studying the weather, you should look at the (a) classroom (b) sky
- (3) We have _____ and _____ weather (a) hot, cool (b) sun, moon
- (4) What is the colour of your hair? (a) black (b) red
- (5) One of the things used for washing our hair is (a) shampoo, water (b) sand, stone
- (6) Who should help in cleaning your ears? (a) Yourself (b) Your parents
- (7) What does it mean to keep things safe? (a) to give it security (b) to keep it unprotected
- (8) Safekeeping is to keep our _____ well (a) belongings (b) earth
- (9) An example of your belongings is (a) cloth (b) sand
- (10) One of these can be used to clean the nose (a) dirty water (b) handkerchief

20 marks

PART B

1a. What is Weather?

b. Name the two(2) types of weather

i. _____ ii. _____

2a. The organ for tasting is

8 marks

b. Give two(2) examples of your belongings that you can keep safe

i. _____ ii. _____

3a. What is Safety?

8 marks

b. What do we use in cleaning our nose? _____

4a. Name four(4) sense organs

8 marks

i. _____ ii. _____

iii. _____ iv. _____

b. The organ for hearing is _____

The organ for seeing is _____ 8 marks

5a. List three(3) things we can use to take care of the mouth

i. _____ ii. _____

iii. _____

b. Give four(4) examples of fruits that taste sweet

i. _____ ii. _____

iii. _____ iv. _____

8 marks

EMINENT KIDS MONTESSORI SCHOOL

3, Ezekiel Salako Street, Off Ifedayo Street, Igbobi Estate,
Olope Meji, Mowe, Ogun State.



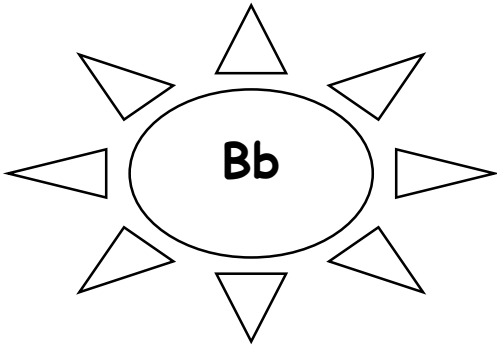
LEARN AT HOME PACK
(2019-2020 SESSION)

NIDO 2

NAME:

SUBJECT: PHONICS

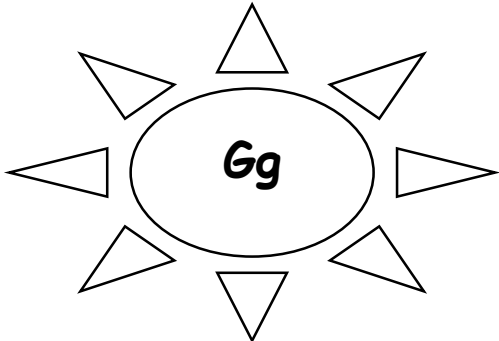
Match the objects with their first sounds



Ball



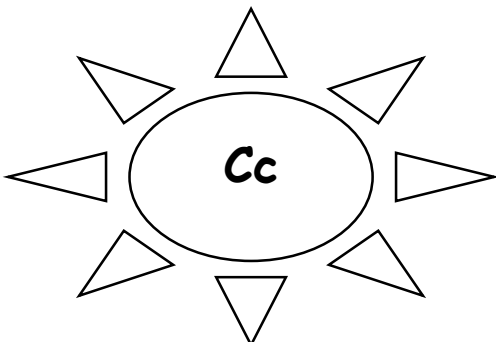
Orange



Fan



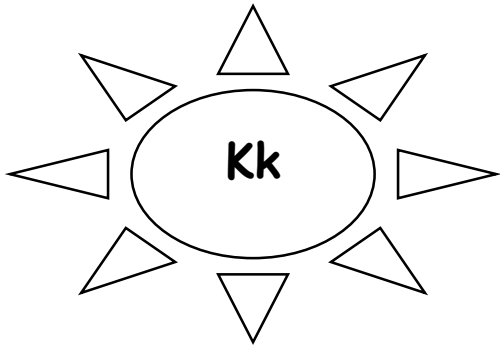
Gun



Fork



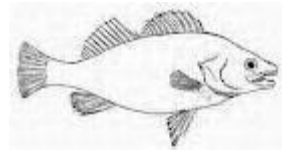
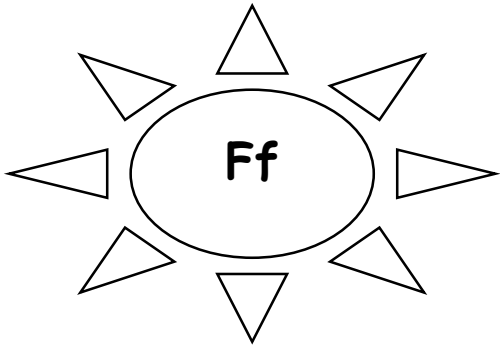
Cup



Kettle



Key


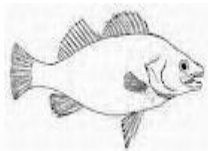


Fish



Comb

(2) Circle the objects that begin with sound "Ff"



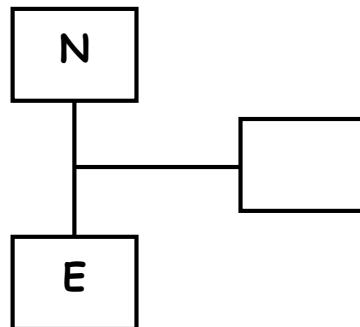
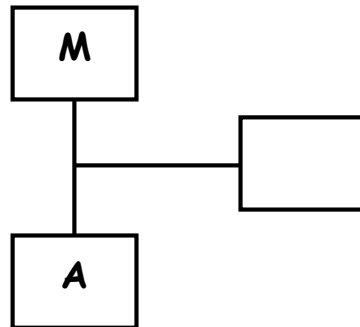
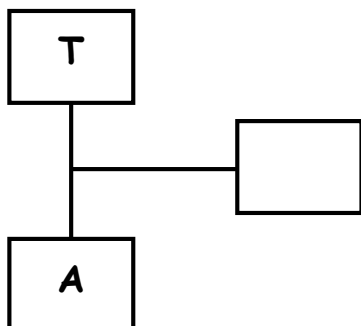
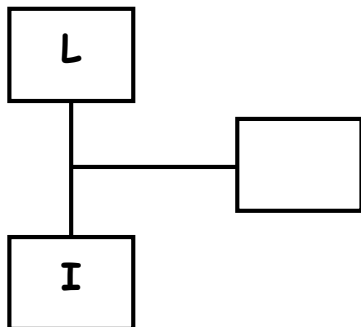
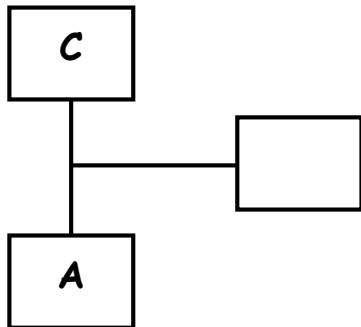
(3) Name three(3) objects that begin with sound 'Mm'

(4) Circle the objects that begin with sound 'Kk'



(5) Name three(3) objects that begin with sound 'Bb'

(6) Blend these two letter words together



EMINENT KIDS MONTESSORI SCHOOL

*3, Ezekiel Salako Street, Off Ifedayo Street, Igbobi Estate,
Olope Meji, Mowe, Ogun State.*



**LEARN AT HOME PACK
(2019-2020 SESSION)**

NIDO 2

NAME:

SUBJECT: PRACTICAL LIFE

DEMONSTRATE HOW TO DO THE FOLLOWING

1. Demonstrate how to tuck in your shirt.
2. Demonstrate how to use a cutlery set.
3. Demonstrate how to arrange books in the shelf.
4. Demonstrate how to serve water to elders.
5. Demonstrate how to carry a tray.
6. Demonstrate how to open and close a water bottle.

My

On